

Clapping Tea and Coffee:

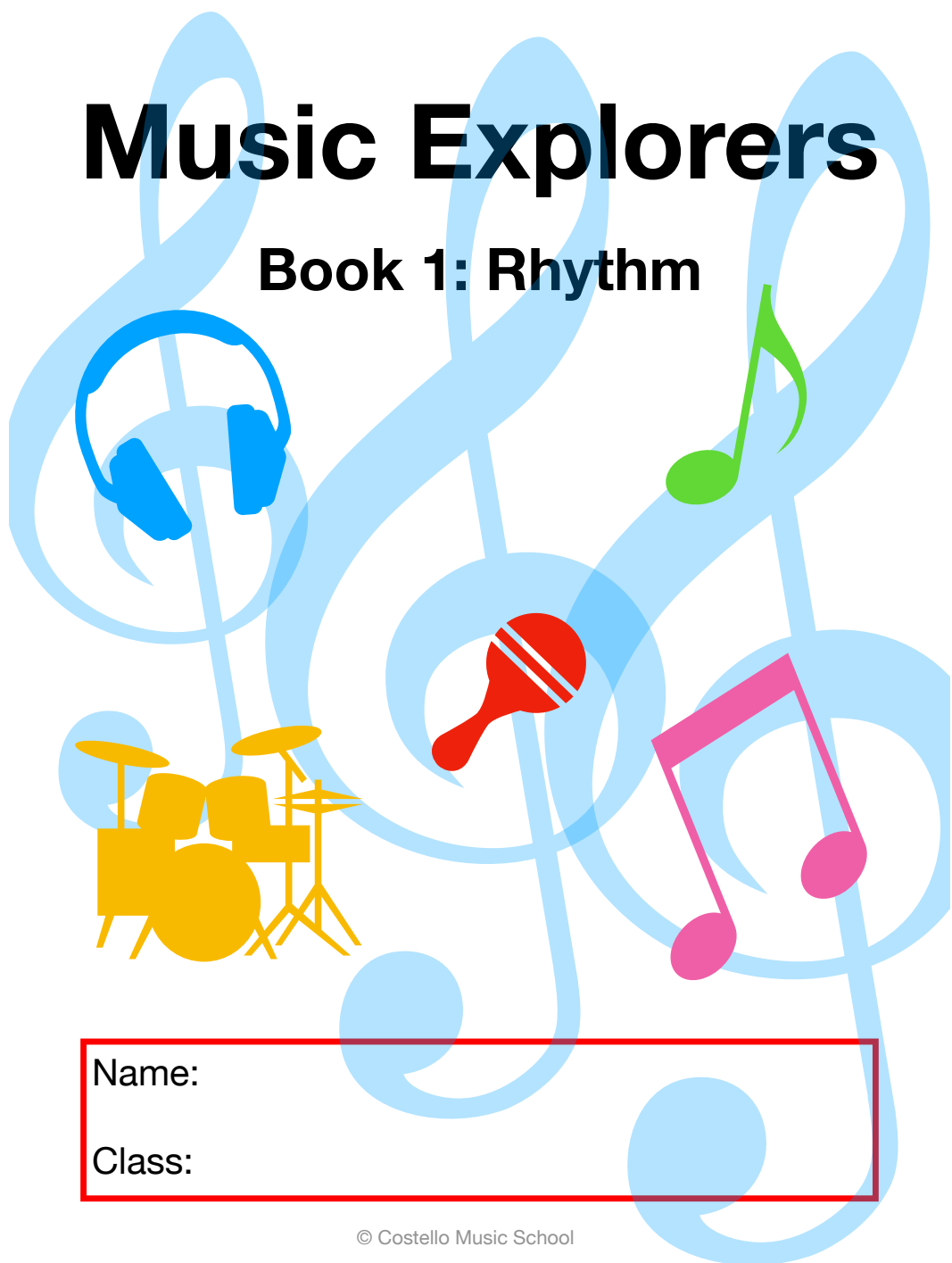
Count 1, 2, 3, 4 in your head to stay in time to the rhythm.



1	♪ ♪ ♪ ♪
2	♪ ♪ ♪ ♪
3	♪ ♪ ♪ ♪
4	♪ ♪ ♪ ♪
5	♪ ♪ ♪ ♪
6	♪ ♪ ♪ ♪

Music Explorers

Book 1: Rhythm



Name:

Class:

Ice Cream Time Values:

Each bowl has a rhythm note on it. Place the correct number of scoops in the bowl to match the rhythm note:



Musical Maths:

Add up the note values:

$$\text{Quarter Note} + \text{Quarter Note} =$$

$$\text{Half Note} + \text{Quarter Note} =$$

$$\text{Quarter Note} + \text{Dotted Quarter Note} =$$


$$\text{Half Note} + \text{Half Note} =$$

$$\text{Whole Note} + \text{Quarter Note} =$$

Name that note:

What name belongs to which note; write the name and time value next to each note

Semibreve Minim Crotchet Quaver Dotted minim



Note match:

Draw a line to match the number value to the correct rhythm note.

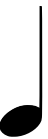
4

2

1

3

half



How many eggs?

Draw the correct amount of eggs under each Hen. **Extra Challenge:** can you name the notes underneath?





Travelling colours

Colour **semibreves** in green. **Minims** in orange. **Crotchets** in blue. **Quavers** in pink. **Dotted minims** in red.

